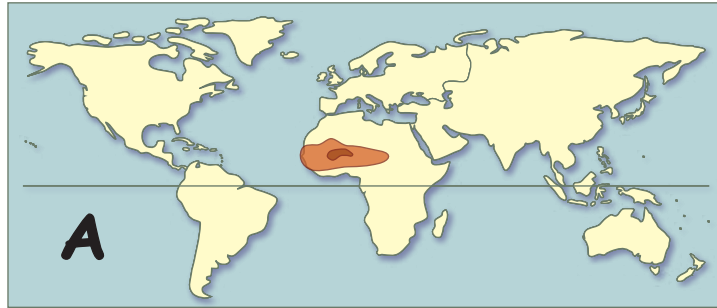


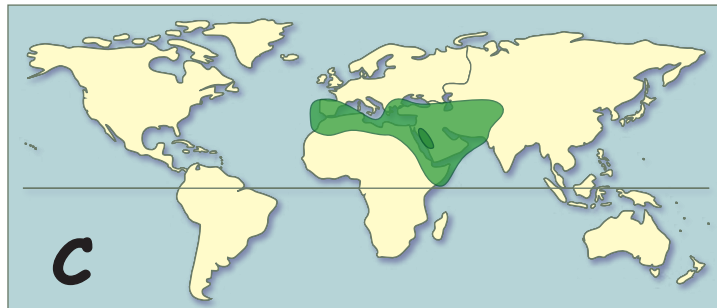
# Imperial Geography (Famous Empires of the Past)



**A**



**B**



**C**



**D**

Write the letter of the map that shows each empire. Then write the names of two modern countries in its area.

\_\_\_ Persian Empire

\_\_\_\_\_

\_\_\_\_\_

\_\_\_ Han Dynasty

\_\_\_\_\_

\_\_\_\_\_

\_\_\_ Mauryan Empire

\_\_\_\_\_

\_\_\_\_\_

\_\_\_ Roman Empire

\_\_\_\_\_

\_\_\_\_\_

\_\_\_ Islamic Caliphate

\_\_\_\_\_

\_\_\_\_\_

\_\_\_ Mongol Horde

\_\_\_\_\_

\_\_\_\_\_

\_\_\_ Mali/Songhai

\_\_\_\_\_

\_\_\_\_\_

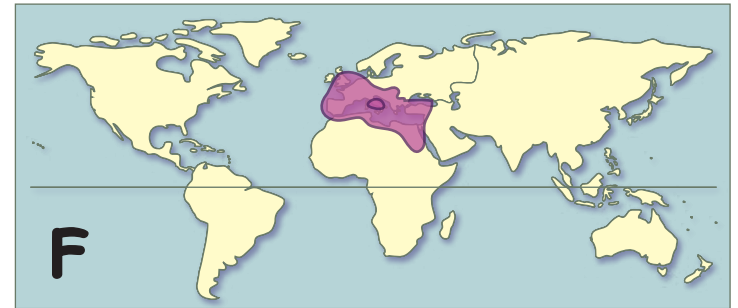
\_\_\_ Inca Empire

\_\_\_\_\_

\_\_\_\_\_



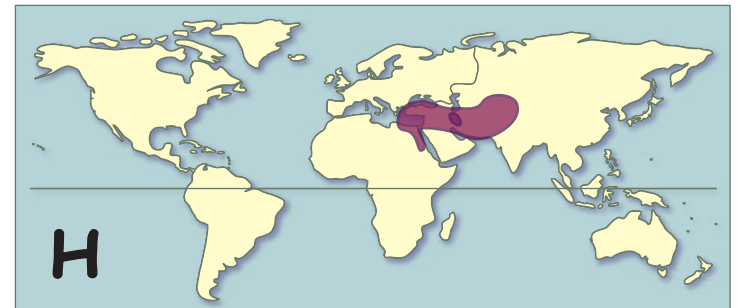
**E**



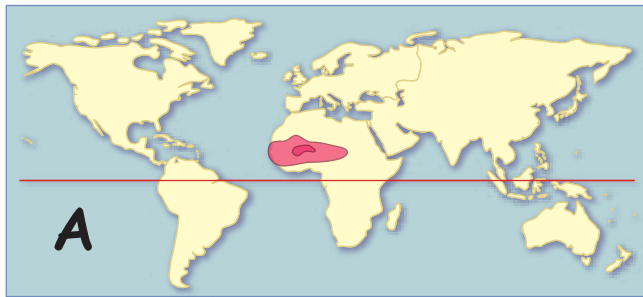
**F**



**G**



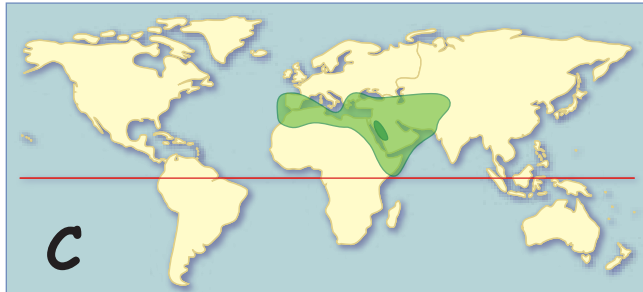
**H**



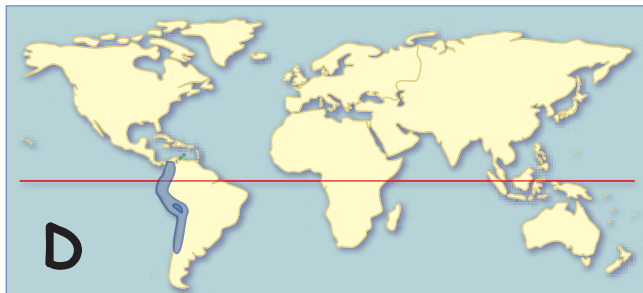
**A**



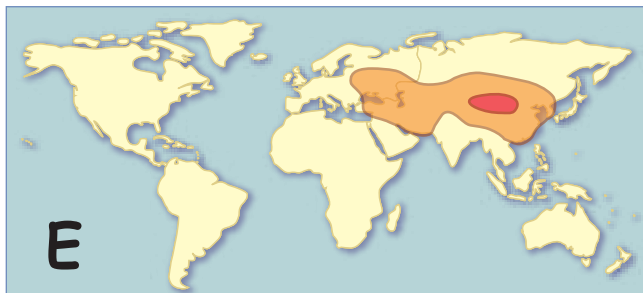
**B**



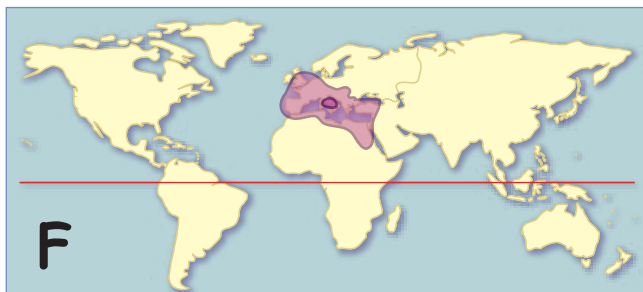
**C**



**D**



**E**



**F**

## The Geography of Empire

Empire	Population in millions	Percent of World in its time
Han Dynasty	58	20
Roman Empire	70	30
Islamic Caliphate	62	30
Mongol Horde	110	25
Mali/Songhai	45	10
Inca Empire	20	5

1. On the line to the left of each name, write the letter of the map that shows the general area ruled by that empire at its peak:
2. On the lines below each name, write the names of two countries now located in that general area.

\_\_\_ Han Dynasty

\_\_\_\_\_

\_\_\_\_\_

\_\_\_ Roman Empire

\_\_\_\_\_

\_\_\_\_\_

\_\_\_ Islamic Caliphate

\_\_\_\_\_

\_\_\_\_\_

\_\_\_ Mongol Horde

\_\_\_\_\_

\_\_\_\_\_

\_\_\_ Ghana/Mali/Songhai

\_\_\_\_\_

\_\_\_\_\_

\_\_\_ Inca Empire

\_\_\_\_\_

\_\_\_\_\_